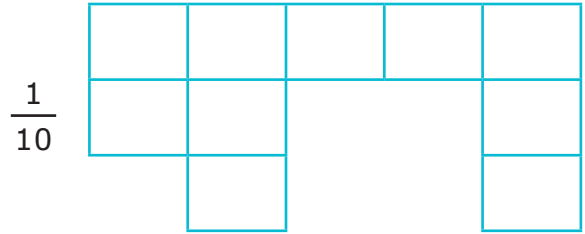
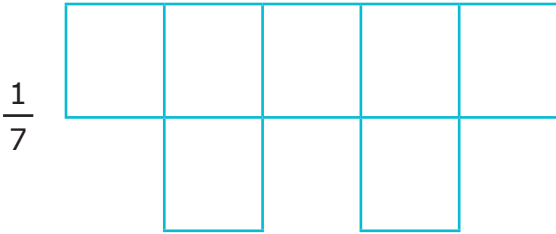


Frazioni e decimali




Attività mirate

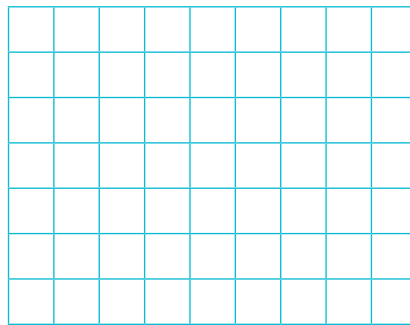
1 Colora l'unità frazionaria indicata.




2 Rappresenta le frazioni. Poi collega con una freccia quelle equivalenti.



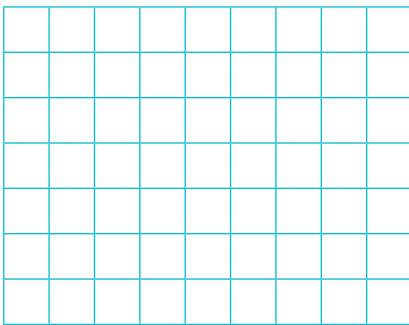
$\frac{2}{5}$



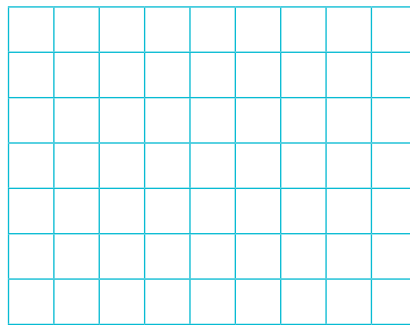
$\frac{4}{10}$




$\frac{1}{3}$



$\frac{5}{7}$



$\frac{6}{15}$



$\frac{3}{9}$

3 Colloca queste frazioni e questi numeri decimali sulla linea dei numeri. Cerca di essere il più preciso possibile.

