
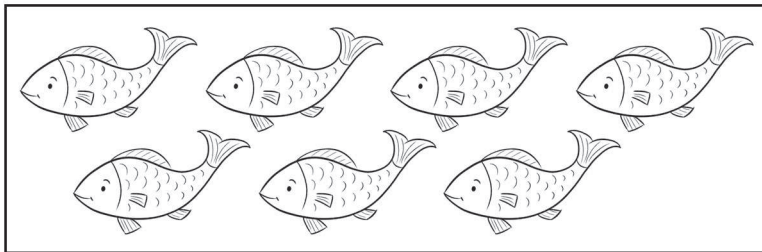
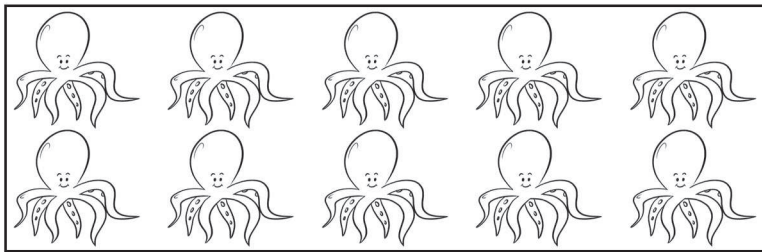




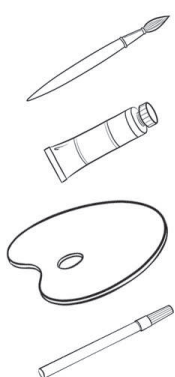
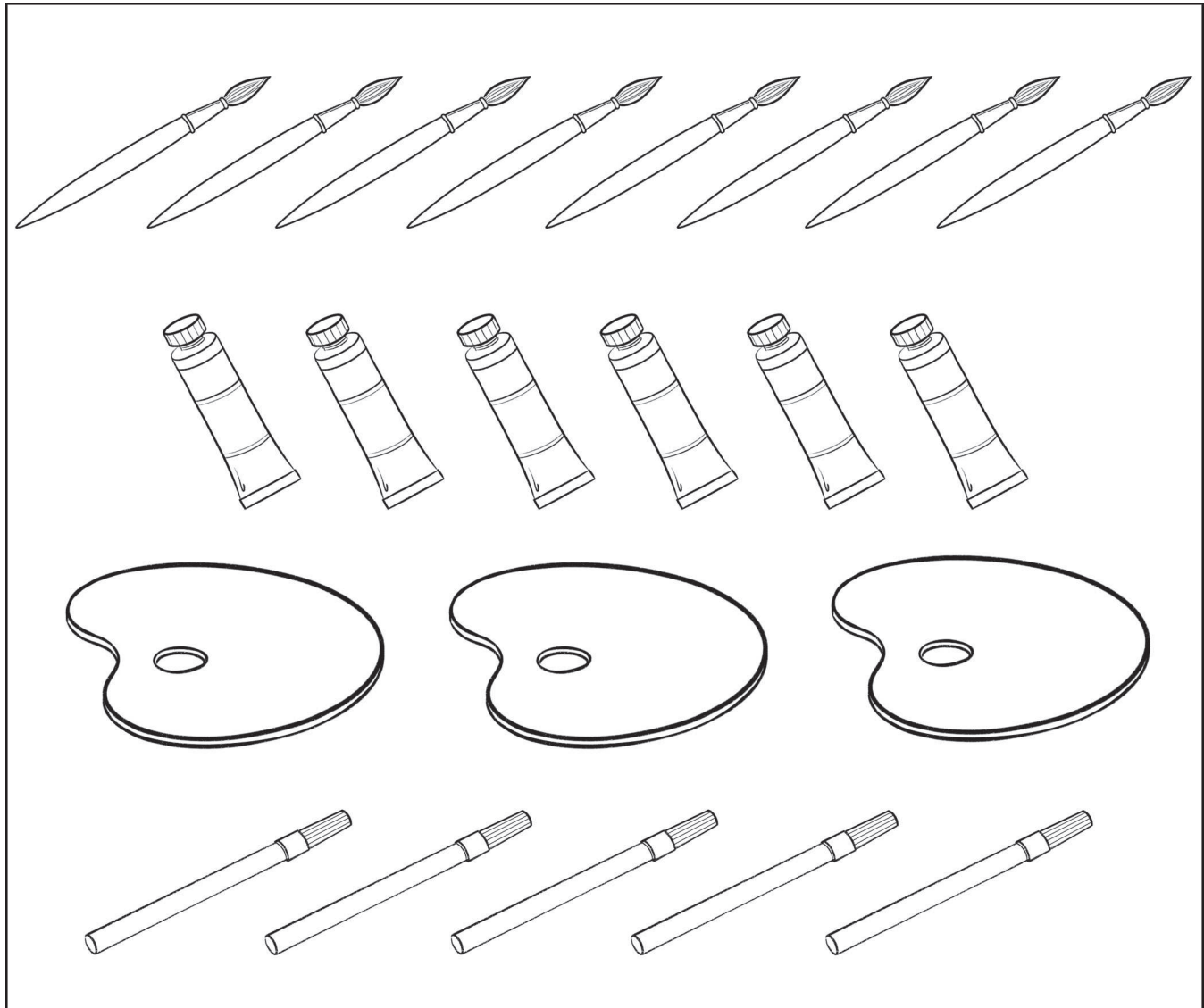
TANTI NUMERI

1. CONTA E SCRIVI IL NUMERO.



UNO A UNO

1. COLORA UN PER OGNI OGGETTO. POI SCRIVI IL NUMERO.



.....
.....
.....
.....

NUMERI SULLA LINEA

1. COLLEGA OGNI CARTA AL NUMERO CORRISPONDENTE SULLA LINEA DEI NUMERI.

5 3 1 2 9 10

0 1 2 3 4 5 6 7 8 9 10

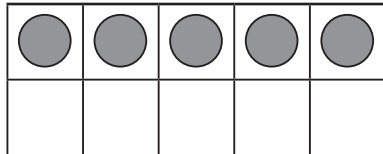
0 6 8 7 4

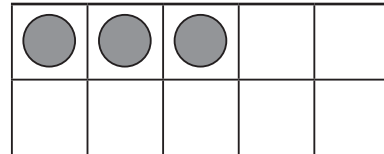
2. COMPLETA LA LINEA DEI NUMERI.

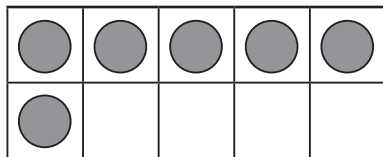
□ □ 2 3 □ □ 6 □ □ 9 □

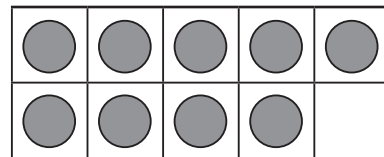
IL PIÙ GRANDE

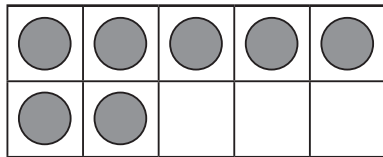
1. CONTA, SCRIVI I NUMERI E IN OGNI COPPIA CERCHIA IL NUMERO PIÙ GRANDE.

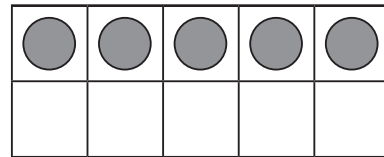


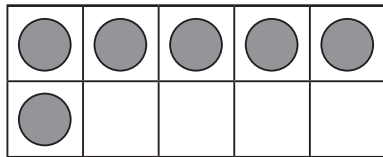


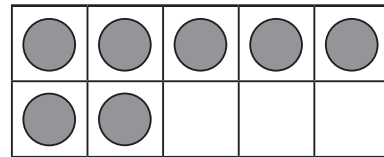


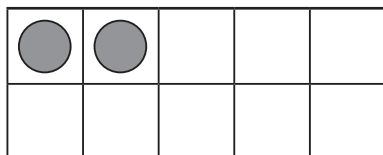


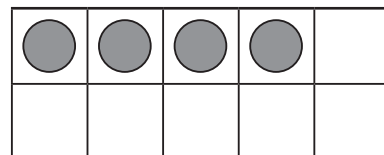


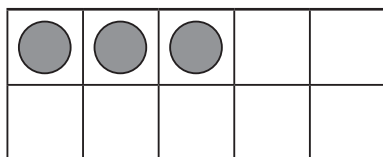


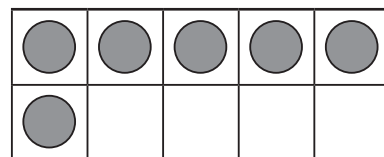


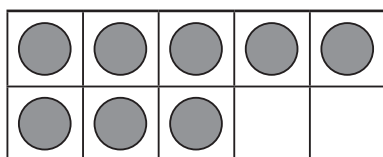


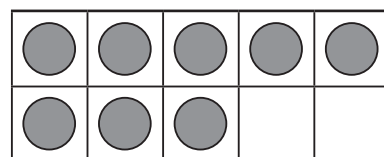


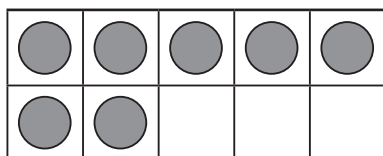


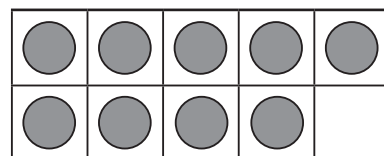












MAGGIORE O MINORE?

1. CONTA I RETTANGOLI, SCRIVI I NUMERI E POI COLORA IL CARTELLINO GIUSTO.



È MAGGIORE DI
È MINORE DI



È MAGGIORE DI
È MINORE DI



È MAGGIORE DI
È MINORE DI



È MAGGIORE DI
È MINORE DI









È MAGGIORE DI
È MINORE DI



È MAGGIORE DI
È MINORE DI


I DADI

1. DISEGNA UN DADO CON IL NUMERO DI PALLINI CORRETTO PER COMPLETARE LA SEQUENZA.



2. ADESSO QUANTI DADI CI SONO IN TUTTO?

3. COMPLETA IL SECONDO DADO PER AVERE IN TUTTO 10 PALLINI.



4. MARTA METTE 2 DADI IN UNA SCATOLA E LA SCATOLA PUÒ CONTENERE 9 DADI. QUANTI DADI DEVE AGGIUNGERE PER RIEMPIRE LA SCATOLA?